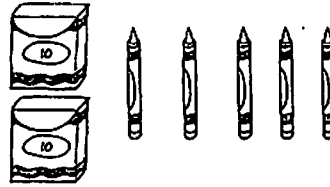


# 1<sup>st</sup> Grade AMI Packet Day 5

Name \_\_\_\_\_

Date \_\_\_\_\_

1. Write the number of items in each set. Then, circle the set that is *greater* in number. Write a statement to compare the two sets.


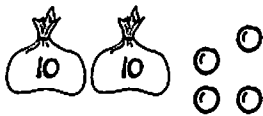


\_\_\_\_\_

\_\_\_\_\_

\_\_\_\_\_ is greater than \_\_\_\_\_.

2. Write the number of items in each set. Then, circle the set that is *less* in number. Say a statement to compare the two sets.



\_\_\_\_\_

\_\_\_\_\_

\_\_\_\_\_ is less than \_\_\_\_\_.

\*Write the missing number.

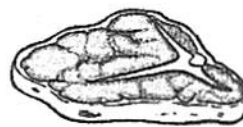

1.	$2 - \square = 2$	
2.	$2 - \square = 1$	
3.	$2 - \square = 0$	
4.	$3 - \square = 3$	
5.	$3 - \square = 2$	

6.	$3 - \square = 1$	
7.	$3 - \square = 0$	
8.	$4 - \square = 4$	
9.	$4 - \square = 3$	
10.	$4 - \square = 2$	

Name \_\_\_\_\_

**PICTURE BLENDER**

Draw a line from the picture to its beginning letters.

**sk****sp****sl****st****sm****tr****sn****tw****scr****spr****spl****str**