

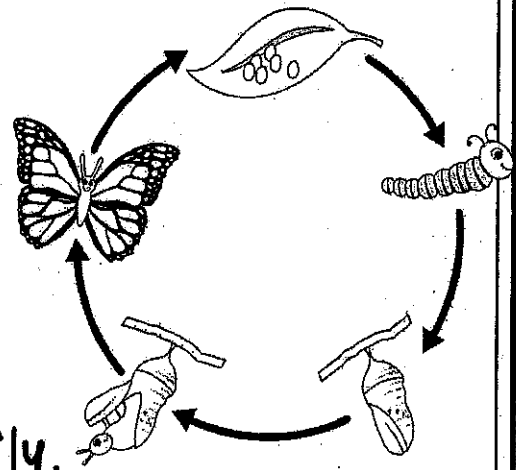
Name: _____

Date: _____, _____

Butterfly Life Cycle

A butterfly life cycle has five stages. The first stage of a butterfly's life is an egg. The egg starts out as a tiny sphere that is attached to a leaf or plant stem. It hatches from the egg and becomes a caterpillar, or larva. It doesn't stay a caterpillar forever. After it gets big and fat, it forms into a chrysalis, which is a like a cocoon.

Once the chrysalis hatches, the butterfly comes out with wet wings. It slowly dries its wings out until they are dry, then flutters away as a butterfly.



Identify the 5 steps of the life cycle.

What is a chrysalis?

- ☐ A. A full-grown butterfly
- ☐ B. A butterfly egg
- ☐ C. A cocoon-like space for the butterfly to grow
- ☐ D. A tiny sphere

Name: _____

Math

Solve these triple digit math problems.


$$\begin{array}{r} 582 \\ -237 \\ \hline \end{array}$$


$$\begin{array}{r} 528 \\ +304 \\ \hline \end{array}$$

$$\begin{array}{r} 256 \\ +237 \\ \hline \end{array}$$


$$\begin{array}{r} 647 \\ -238 \\ \hline \end{array}$$

Write the time next to the clock.





Answer these questions about arrays.





_____ columns
_____ rows

Write the repeated addition sentence.

_____ + _____ + _____ + _____ = _____

Partition these shapes into thirds.



Name: _____

Math

Solve these triple digit math problems.


$$\begin{array}{r} 582 \\ -237 \\ \hline \end{array}$$


$$\begin{array}{r} 528 \\ +304 \\ \hline \end{array}$$

$$\begin{array}{r} 256 \\ +237 \\ \hline \end{array}$$


$$\begin{array}{r} 647 \\ -238 \\ \hline \end{array}$$

Write the time next to the clock.





Answer these questions about arrays.



_____ columns

_____ rows

Write the repeated addition sentence.

_____ + _____ + _____ + _____ = _____

Partition these shapes into thirds.

